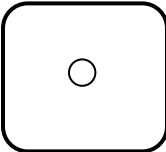
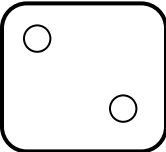
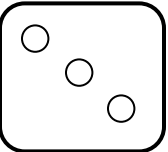
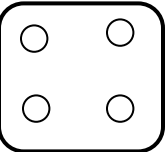
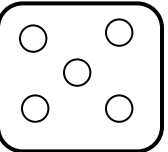

	<b>COLEGIO COLOMBO BRITANICO</b>	
	<b>AULA TALLER DE MATEMÁTICAS</b>	
	<b>GRADO:</b> Pre jardín	<b>Tema:</b> Números del 1 al 6

**FECHA:**







<b>Pensamiento:</b>	Numérico
<b>Conceptos:</b>	Números del 1 al 6
<b>Desempeños:</b>	Identifica y grafica los números del 1 al 6.







Nombre: \_\_\_\_\_

Colorea los punticos y su número correspondiente

					
<b>1</b>	<b>2</b>	<b>3</b>	<b>4</b>	<b>5</b>	<b>6</b>
_____	_____	_____	_____	_____	_____

Lanza el dado y dibuja los puntos que te salieron, luego escribe debajo el número correspondiente

					
_____	_____	_____	_____	_____	_____

					
_____	_____	_____	_____	_____	_____